

F] Read the following sentence and state their kind : (3)

- 1) The next morning the Principal found the letter on her desk.
- 2) Walk down the street.
- 3) What makes you laugh at this serious hour ?

Q III A] Complete the following sentences : (3)

- 1) The officer could not return without _____.
- 2) Computers can carry out the most difficult calculations with _____.
- 3) Androcles did not like _____.

B] Read the passage and answer the questions given below : (5)

One day, Chen Yaozi was practising his skills of archery in front of many admirers. He noticed an old man was standing at the back. The old man was carrying gourds of oil that were hanging from a long cane on his shoulder. All the other people were clapping their hands and praising Chen Yaozi. But this old man was quiet. He neither clapped nor uttered words of praise.

Questions :

- 1) What was Chen Yaozi doing in front of many admirers ?
- 2) What did he notice ?
- 3) Identify the following from the passage :
 - a) The past tense form of the verb – ‘clap’
 - b) Two adjectives
 - c) A proper noun and a common noun

C] Answer the following in one sentence : (6)

- 1) Why was the Sultan surprised?
- 2) Who began to wail, and why ?
- 3) What did the caterpillar change into ?
- 4) What can you do with hot liquid glass ?
- 5) What can a flint produce ?
- 6) What does the child want the mother to do in the evening ?

D] Answer in brief : (6)

- 1) Who was king Ferdinand? What was his complaint ?
- 2) How did Ivan kill the dragon ?
- 3) What tells us that Androcles was not a coward ?

Grammar

Q IV A) Do as directed: (10)

- 1) The elephant has great strength.
(Underline the abstract noun)
- 2) My father is _____ engineer and my mother is _____ dentist.
(Fill in the blanks with ‘ a ’ or ‘ an ’)
- 3) swim. (Write the ‘ing’ form of the verb given)

- 4) Harry friend is very brilliant. (Rewrite the sentence using (s) or only () to show possession)
- 5) The lion gave a loud and terrible roar. (Underline the adjectives)
- 6) beautiful (Write the degrees of comparison of the given adjective)
- 7) The clever and devoted teacher changed her student's life.
(Divide the sentence into subject and predicate)
- 8) where does mrs desai live
(Rewrite the sentence using proper punctuation marks)
- 9) The boy read the lesson loudly and clearly. (Identify the adverbs)
- 10) The boy dived _____ the pool.
(Fill in the blank with a suitable preposition)

B) Write an essay on 'Good Manners' (5)

**C) Write a letter to your father requesting him to send you some money.
(You are living in a school hostel) (3)**

D) Write 4-5 sentences about the picture given below : (2)

All the best

Thakur Educational Trust's (Regd.)
THAKUR VIDYA MANDIR HIGH SCHOOL & JUNIOR COLLEGE
II Terminal Re-Examination 2016-17
Subject : English

Std: IV
DATE - 09/02/2017

MARKS: 80
Time : 2hrs 45 mins

Q1 A] Fill in the blanks : (5)

- 1) The new arrivals had been displayed in the _____.
- 2) When the friends said sorry, their hearts were _____.
- 3) The Sultan was surprised when he heard the untimely call of the _____.
- 4) The children were allowed to keep the book with them for _____.
- 5) Ivan was not afraid of _____.

B] Match the columns with reference to the lessons : (5)

Column A

- 1) emerald
- 2) glass
- 3) important
- 4) Leonard
- 5) grand

Column B

- a) people
- b) king
- c) feast
- d) brittle
- e) precious stone

C] Write a synonym for the given words : (3)

- 1) official 2) became 3) impolite

D] Write an antonym for the following words : (4)

- 1) clear 2) slave 3) impermeable 4) appear

E] Use the following phrases in your own sentences : (3)

- 1) be all ears
- 2) high and low
- 3) draw near

QII A] Write a rhyming word for the following words : (2)

- 1) fly 2) sail

B] State whether the following statements are true or false: (5)

- 1) The Principal sent the student's letter to the Librarian.
- 2) The duckling's mother did not love him.
- 3) Glass is made from sand.
- 4) The child would drop onto the earth again in the evening.
- 5) The officer was successful in serving the summons.

C] Write the names of the young ones : (3)

- 1) sheep 2) goose 3) swan

D] Who said to whom? (3)

- 1) " Your Majesty, I am happy because you obeyed the law."
- 2) " Stop laughing dear, you will drop the plate. "
- 3) " What a rude, impolite creature you are !"

E] Write the simple past tense forms of the following verbs : (4)

- 1) say 2) explain 3) go 4) drink

F] Read the following sentence and state their kind : (3)

- 1) Open the door.
- 2) Wow ! What a beautiful painting !
- 3) I am going to my native place.

Q III A] Complete the following sentences : (3)

- 4) The guards refused to let the officer _____.
- 5) Computers can carry out the most difficult calculations with _____.
- 6) The wizard hated _____.

B] Read the passage and answer the questions given below : (5)

Long, long ago in faraway China, they lived an archer called Chen Yaozi. He was a very skilled archer and could perform wonderful feats of archery. He could hit the target precisely at the centre even when it was placed at a very long distance. He liked to show off his skill to the admiring crowds that gathered around him.

Questions :

- 4) Where did Chen Yaozi live ?
- 5) What did Chen Yaozi like ?
- 6) Pick out two adjectives from the passage.
- 7) Pick out two proper nouns.
- 8) Write the '- ing' form of 'perform'.

C] Answer the following in one sentence : (6)

- 1) What did the caterpillar change into ?
- 2) Where does a flint lie ?
- 3) What does the child want the mother to do in the evening ?
- 4) What effect did Griselda's magic have on the king ?
- 5) What did Ivan know about dragons ?
- 6) What did Androcles ask for ?

D] Answer in brief : (6)

- 1) Why did king Leonard want to stop laughing ?
- 2) How is glass made ?
- 3) How did Ivan kill the dragon ?

Grammar

Q IV A) Do as directed: (10)

- 10) Fill in the blanks with suitable articles.
 - i) Rahul went to _____ market.
 - ii) There is _____ old building near my house.
- 11) The rabbit ate all the carrots in the garden.
(Underline the subject in the above sentence)
- 12) Add a suffix to the following words to form the correct adjective :
 - i) faith
 - ii) fear

- 13) The dumping ground is near the riverside.
(Underline the preposition in the above sentence)
- 14) Shyam goes to school every day.
(Rewrite the sentence by replacing the underlined words with a single word)
- 15) The old lady walked slowly.
(Underline the adverb)
- 16) Rewrite the sentence given below, using (s) or only () to show possession or belonging :
My uncle shop is near the bus stand.
- 17) Shivaji is famous for his bravery.
(Underline the abstract noun)
- 18) Write the correct adjectives of comparison in the blanks below :
good _____
- 10) Fill in the blank with the correct question forming word :
_____ is your school situated ?

B) Write an essay on 'Good Manners'. (5)

**C) Write a letter to your father requesting him to send you some money.
(You are living in a school hostel) (3)**

D) Observe the following picture and write 4-5 sentences about it. (2)

All the best

Q1. A] Complete the following :**(7)**

- 1) 35 minutes past 3 is _____.
- 2) Quarter to 11 is _____.
- 3) For the change of 10 rupee coin _____ rupee 5 coins are required.
- 4) For the change of 500 rupee note _____ rupee 10 notes are required.
- 5) Half kilogram is _____ grams.
- 6) $15 \times 9 =$ _____.
- 7) $18 \times 4 =$ _____.

B] Match the columns :**(6)**

- | ‘A’ | ‘B’ |
|---------------------|--------------------------|
| 1) Quarter Past 3 | a) 473 |
| 2) $10 \frac{3}{4}$ | b) 9:25 |
| 3) 696 | c) 3:15 |
| 4) 473 | d) $600 + 90 + 6$ |
| 5) 25 mins past 9 | e) Ten and Three quarter |
| 6) $3642 - 2411$ | f) $\frac{11}{21}$ |
| | g) 1231 |

C] Do as directed :**(10)**

- 1) Write the next three numbers.
452
- 2) Write given number in figures.
Nine thousand and twenty – eight _____
- 3) Write the given number in words.
7364 _____
- 4) Using each of digits 6, 4, 3, 7 make two four – digit numbers. _____
- 5) Write the biggest number that can be made using the given digits :
9, 2, 5, 7, 3 _____
- 6) Write the following number in expanded form 81,246 _____
- 7) Write the place value of the underlined digit :
97243 _____
- 8) Write down the number it makes :
7TTH, 4T, 9 Th, 5u, 2 H - _____

9) $\frac{1}{9} \square \frac{1}{7}$ (Use proper sign)

10) $\frac{4}{6} \square \frac{3}{6}$ (Use proper sign)

Q2. A] Write the numbers in ascending and descending order using the proper sign (< , >) :

1) 4576, 3241, 9764

2) 7241, 7842, 7651

B] Convert the following :

(8)

1) 16 km into m

2) 78 cm into mm.

3) 18 ℓ into ml .

4) 9kg into g

C] Complete the following :

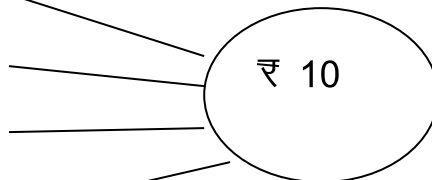
(10)

1) _____ 50 paise coins

_____ 1 rupee coins

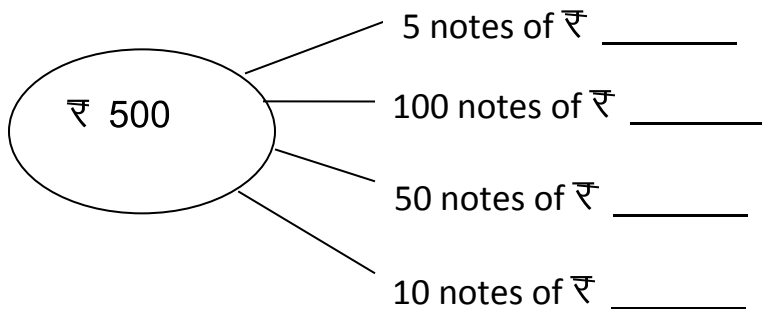
_____ 2 rupee coins

_____ 5 rupee coins

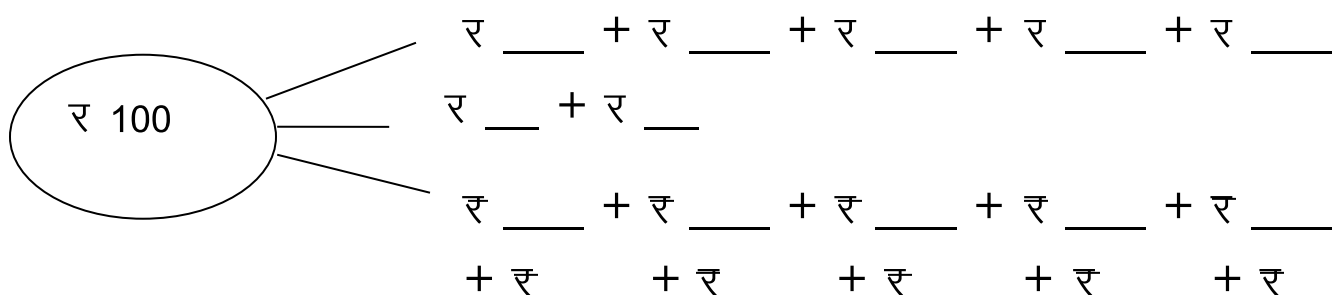


2) Fraction	Addition	Multiplication	How many times
a) $\frac{3}{7}$			
b) $\frac{6}{8}$			

3) Change for 500 rupee note



4) Change for 100 rupee note



Q3. A] Solve the following horizontally :

(8)

- 1) $14705 + 45251$ 2) $54684 - 34271$
3) $47231 + 26240$ 4) $54622 - 42611$

B] Solve the following vertically :

(10)

- 1) $46101 + 32410$ 2) $62143 + 7216$
3) $57874 - 26034$ 4) $76421 - 2624$
5) $98427 - 6542$

C] Study this page of calendar and answer the questions :

(4)

December -2016



1. How many days does this month have ?
2. How many Thursdays does this month have ?
3. Which dates fall on Friday ?
4. This year on which day of the week is Christmas ?

Q4 A] Solve :

(10)

- 1) How many grams is five and three quarter kilograms ?
- 2) Which measures will be used to pour Four and One quarter litre of water and how many times will they be used ?
- 3) Karan bought a quarter kilogram of Oranges, half kilograms of Kiwis, one kilogram of lime and three quarters kilogram of Strawberries from a shop. What was the total weight of his purchases?
- 4) Three and a half metres of cloth is required for one dress. How much cloth is required for 8 dresses ?
The month of April has 30 day.

Cloth required for 1 dress = _____

= _____ m + _____ m

Therefore, cloth required for 8 dresses

= _____ m X _____ + _____ m X _____

= _____ m + _____ m = _____ m.

B] Solve the word problems :

(13)

- 1) Using the number 9764 and 6473, write one addition word problem and solve it.
- 2) Rohan buys school bag worth ₹ 560 and shoes worth ₹ 400 and school uniform worth ₹ 650. How much total did he spend in all ?
- 3) 3645 people visited a historical place, of these 1680 were females and remaining were males. Find the number of males who visited the historical place.
- 4) Mrs. Rao bought a L.E.D set worth rupees 35,540 and washing machine worth rupees 15,550. How much more did the L.E.D cost than the washing machine ?

All the best

Q1. A] Complete the following :**(7)**

- 8) Quarter past 5 = _____ mins past 5
 9) 45 mins past 4 = Quarter to _____.
 10) The change for 50 rupee note is ____ 20 rupees notes and ____ 10 rupee note.
 11) The change for a 10 rupee coin is _____ 50 paise coins.
 12) _____ weights of 20g is 100g.
 13) $17 \times 5 =$ _____
 14) $13 \times 7 =$ _____

B] Match the columns :**(6)****'A'****'B'**

- | | | | | | | | |
|---|---------------------|--|--|--|--|--|------------------------|
| 1) Quarter to | a) Nine upon eleven | | | | | | |
| 2) <table border="1" style="display: inline-table; vertical-align: middle;"><tr><td> </td><td> </td><td> </td><td> </td><td> </td><td> </td></tr></table> | | | | | | | b) Seven and one forth |
| | | | | | | | |
| 3) $7\frac{1}{4}$ | c) 30 mins past 11 | | | | | | |
| 4) Half past 11 | d) 7 : 45 | | | | | | |
| 5) $4\frac{9}{11}$ | e) $\frac{1}{6}$ | | | | | | |
| 6) $4444 - 2444$ | f) 384 | | | | | | |
| | g) 2000 | | | | | | |

C] Do as directed :**(10)**

- 1) 23, 618 – (Write the number in words)
 2) 49, 444 – (Write the place value of the underlined digit)
 3) 90,009 – (Write the expanded form)
 4) _____ , 9999, _____ (Write before & after no.number)
 5) 7T, 5 Th, 6 Th, 4H – (Write the number made by these digits)
 6) 745 – (Write two breakups of the number)
 7) 854 – (Write in Devnagari script)
 8) Forty thousand and sixty – (Write in numerals)

- 9)

 =

--

 (Write the fraction for the shaded figure shown)

- 10) $\frac{1}{9}$

--

 $\frac{1}{11}$ (Use > , <)

Q2. A] Write the numbers in ascending and descending order using sign (< , >) : (4)

1) 2114, 4121, 2141

2) 7856, 5678, 7685

B] Convert the following :

(8)

1) Litres into millilitres.

- a) 18 ℓ b) 7 ℓ

2) Kilometres into metres.

- a) 83 km b) 60 km

3) Centimetres into millimetres .

- a) 44 cm b) 40 cm

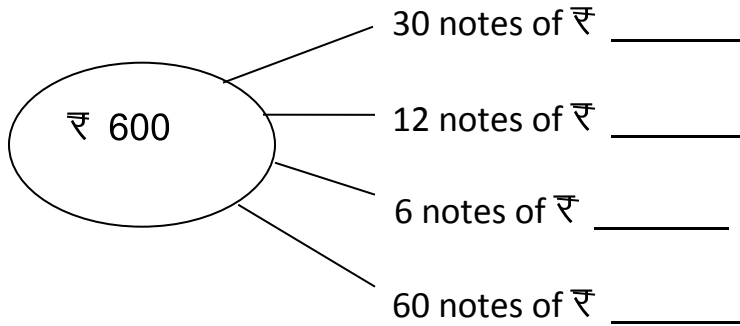
4) metres into centimetres.

- a) 64 m b) 28 m

C] Complete the following :

(10)

1)

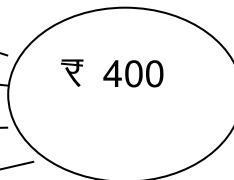


2) _____ 10 rupees notes

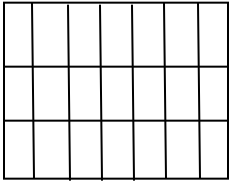
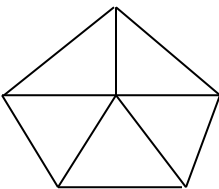
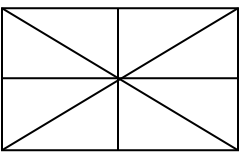
_____ 20 rupees notes

_____ 50 rupees notes

_____ 100 rupees notes



3)

Shapes	Shaded fraction	Unshaded fraction
a) 		
b) 		
c) 		

4)	Fraction	Addition	Multiplication	How many times
a)	$\frac{4}{8}$			
b)	$\frac{2}{6}$			

Q3. A] Arrange horizontally and solve :

(8)

2) $26341 + 41544$ 2) $96523 + 3162$

3) $8647 - 5125$ 4) $9840 - 1800$

B] Arrange vertically and solve :

(10)

1) $8008 - 2129$ 2) $9339 - 6583$

3) $572 + 7819 + 5413$ 4) $6000 + 3500 + 400 + 60 + 300 + 600 + 125$

5) $400 + 780 + 90 + 74$

C] Study the calendar and answer the questions :

(4)

January -2017



1. How many days does this month have ?
2. How many Thursdays does this month have ?
3. Which dates fall on Saturday ?
4. In January, which days occur five times ?

Q4 A] Solve :

(10)

- 1) How many grams is four and a quarter kilograms ?
- 2) How many millilitres are there in three and three quarter litres?
- 3) Three and a half meter of cloth is required for one uniform. How much cloth is required for 6 uniforms?

Cloth required for 1 uniform = _____
= _____ m + _____ m.

Therefore, cloth required for 6 uniforms
= _____ m x _____ + _____ m x _____
= _____ m + _____ m = _____ m.

Ans. _____

- 4) The vacation of a school started on the 29th of April and the school started again on the 15th of June. How many days did the school have as vacation ?

The month of April has 30 day.

Vacation started on 29th April

So, after 28 April up to 30 April = _____

31 days of the month of May

So, vacation for the school was _____ + _____ = _____ days.

B] Solve the word problems :

(13)

- 1) Mr. Pinto bought T.V. set worth rupees 35,540 and Washing machine worth rupees 18,395. How much more did the T.V. set cost than the washing machine ?
- 2) Meena buys purse worth rupees 1190 and dress worth rupees 2060 and bangles worth rupees 410. How much total did she spend in all?
- 3) In a nursery, there were 26,740 saplings. 11,550 were apple saplings and 8,375 were chikoo saplings. How many other saplings were there?
- 4) Based on the given information, make one subtraction problem and solve it. The population of Nagpur is 86,350 and that of Mumbai is 99,293.

All the best

Thakur Educational Trust's (Regd)
THAKUR VIDYA MANDIR HIGH SCHOOL & JUNIOR COLLEGE
II Terminal Examination 2016-17
Subject: EVS - I

Std: IV
Date: 10 / 02 / 2017

Marks: 48
Time : 2 hrs.

QIA) Fill in the blanks: (6)

- 1) The grains is separated from the ears by a process called _____ .
- 2) When the soil becomes hot & _____ the crop is sown.
- 3) There is _____ even in an empty container.
- 4) Oxygen from air used for _____ and burning.
- 5) The anti-snake bite injection is available at _____ hospital .
- 6) The sub-direction between the north & the west is called _____.

QIB) Write true or false .Correct the false statement : (6)

- 1) Singadas are obtained from the sea water.
- 2) There are water vapors in the air.
- 3) South faces the north .
- 4) Railway lines are man-made.
- 5) Astambha is the highest peak in Maharashtra .
- 6) The number of hours in the day & night on 22 March are equal.

QIC) Match the column : (6)

- | A | B |
|------------------------|-------------------------|
| 1) Makhanas | a) Atmosphere |
| 2) Layers of the earth | b) burning causes smoke |
| 3) fuel on the earth | c) A freshwater plant |
| 4) Brushing | d) Man-made |
| 5) Cinema-house | e) Konkan region |
| 6) Mangoes | f) get cured quickly |

QIIA) Name the following : (6)

- 1) Two vehicles used for transporting grains .
- 2) Two cash crops grown in Maharashtra.
- 3) Name two things in which air is filled under pressure.
- 4) Name two sub-directions.

B) Strike out the wrong words : (4)

- 1) We play together and share our tiffins / books.
- 2) The girls / boys lag behind in school or even leave it.
- 3) Deaf people use Braille/ sign language.
- 4) Ramps make it possible for people in wheelchairs / blind people to enter the building.

C) Guess who.

(4)

- 1) A person who works hard to grow crops in the farm.
- 2) A person who needs to use sign language.
- 3) A child who was felicitated with the National Bravery Award by the Prime Minister of India in 2013.
- 4) A person who is disable in one hand, made the country famous worldwide in swimming competition.

QIII A) Answer in one sentence :

(6)

- 1) What is the unnecessary plant called that grow with grain ?
- 2) Which gas is present in soda water?
- 3) What gets mixed with the air when water boils ?
- 4) What should be give to a patient who is vomiting continuously?
- 5) What is meant by natural goods ?
- 6) Why does man migrate ?

B) Give reasons :

(4)

- 1) Big families were scattered .
- 2) We should speak lovingly with our grandparents.

C) Answer the following questions in brief :

(6)

- 1) What do we do in school everyday besides studying?
- 2) What basic & other things did you learn?
- 3) Describe the spinning of the earth.

ALL THE BEST

Thakur Educational Trust's (Regd)
THAKUR VIDYA MANDIR HIGH SCHOOL & JUNIOR COLLEGE
III Terminal Examination 2015-16
Subject: EVS - I

Std: IV

Marks: 48

Date: 01 / 04 / 2016

Time : 2 hrs.

QIA) Fill in the blanks: (5)

- 1) _____ is mainly grown in the areas of high rainfall .
- 2) Children with special needs also have the right to _____ .
- 3) Blind persons can read and write by using their sense of _____ .
- 4) _____ is more intelligent than all other animals.
- 5) The mixture obtained on dissolving a substance in water is called _____ .

QIB) Write true or false .Correct the false statement : (5)

- 1) Railway lines are nature - made.
- 2) The number of hours in the day and night on 22 March are equal .
- 3) We learn through a common language in the school .
- 4) We have been successful in eradicating polio in our country .
- 5) Turmeric powder dissolves in water completely .

QIC) Match the column : (4)

A

B

- | | |
|--------------------------------|----------------------|
| 1) The direction of the sunset | a) Nature made |
| 2) Waterfall | b) A boat |
| 3) To travel through water | c) West |
| 4) Things lighter than water | d) East |
| | e) Dry leaves, twigs |

QII A) Strike out the wrong words : (4)

- 1) Mangoes/ Bananas are largely grown in the district of Jalgaon.
- 2) From 22 March till 21 June / 22 September, our days become longer and nights shorter.
- 3) The girls / boys lag behind in school or even leave it.
- 4) Ramps make it possible for people in wheelchairs / blind people to enter the building.

QIIB) Answer in one sentence : (8)

- 1) Where do materials for man – made objects come from ?
- 2) Which parts of Maharashtra grow oranges ?

3) Why does the cycle of day and night go on without stopping ?

4) Who are the children with special needs ?

5) Who is Sharath Gayakwad?

6) How does a tsunami affect vehicles on the coast?

7) What is dam?

8) How should be the drinking water?

QIIC) Name the following :

(8)

1) Two natural goods .

2) Two main cash crops grown in Maharashtra .

3) Name the capital and second capital of Maharashtra.

4) A person who needs to use sign language.

5) Two means of transport used in mountainous region.

6) Two natural disasters.

7) Two diseases spread by mosquitoes.

8) Two substances that can dissolve in water.

QIIIA) Answer the following questions in brief :

(10)

1) How did the man invented the idea of a wheel?

2) What are the damages created by earthquake?

3) How people used to communicate in the olden days?

4) Write in brief about pre – monsoon showers ?

5) Write in brief about mot.

QIII B) Study the map of Maharashtra given below and answer the following (4) questions:

1) Name the district which have hot water spring.

2) Name the district which have caves.

3) Name the district which grows wheat crops.

4) Name the region of high rainfall in Maharashtra.

ALL THE BEST

- प्र. 1. नीचे दिए गए हिन्दी शब्दों के अंग्रेजी अर्थ लिखिए । (कोई दो) 2
1) जेब 2) न्यायालय 3) नटखट
- प्र. 2. रिक्त स्थानों की पूर्ति कीजिए । 3
अ) वे _____ के किस्से सुनाते हैं ।
ब) इसके _____ रूपये लगेंगे ।
क) मैं तो इसे अकेली _____ थी ।
- प्र. 3. निम्नलिखित वाक्य किसने – किससे कहे हैं ? 3
अ) "मेरी माँ नर्स हैं और तुम्हारी ?"
ब) "इन्हे मीठी नींद सोने दो ।"
क) "मुझे न लालवाला गुब्बारा चाहिए ।"
- प्र. 4. नीचे दिए गए कविता की पंक्तियाँ पूर्ण कीजिए । 2
अ) से कसता, स्वयं ।
..... सही दिया, फिर क्यों
- प्र. 5. नीचे दिए गए प्रश्नों के उत्तर एक पूर्ण वाक्य में लिखिए । 5
1. पाँच जंगली जानवरों के नाम लिखिए ।
2. बुआ जी तबस्सुम को क्या सुनाती हैं ?
3. चित्रा ने क्या कहा ?
4. दर्जी कैसा था ?
5. बगिया में क्या गिरे थे ?
- प्र. 6. नीचे दिए गए प्रश्नों के उत्तर दो-तीन पंक्तियों में लिखिए । 4
1. आशा क्यों रूआँसी हो गई ?
2. चादर पर कौन- कौन से चित्र थे ?
- प्र. 7. अ) नीचे दिए गए शब्दों के समानार्थी शब्द लिखिए । (कोई दो) 2
1) बगिया 2) शादी 3) पास
- प्र. 7. ब) नीचे दिए गए शब्दों के विरुद्धार्थी शब्द लिखिए । (कोई दो) 2
1) खडी 2) नीचे 3) गुडिया
- प्र. 7. क) लिंग परिवर्तन कीजिए । 2
1) राजकुमार 2) हाथी
- प्र. 7. ड) वचन बदलो । 2
1) भाषा 2) तोता
- प्र. 7. इ) नीचे दिए गए वाक्यों में संज्ञाओं को रेखांकित कीजिए । 3
1) चाचा नेहरू पढाई में बड़े तेज थे ।
2) मोहन ईमानदार बालक है ।
3) तोता एक सुंदर पक्षी है ।

- प्र. 1. नीचे दिए गए हिन्दी शब्दों के अंग्रेजी अर्थ लिखिए । (कोई दो) 2
1) उछल 2) सूर्यमुखी 3) निकट
- प्र. 2. रिक्त स्थानों की पूर्ति कीजिए । 3
अ) मुझे सभी ————— दिखाइए न।
ब) ————— हमें राजा-रानी की कहानियाँ सुनाती हैं ।
क) आशा ————— फूलों को देखकर खुश हुई।
- प्र. 3. निम्नलिखित वाक्य किसने – किससे कहे हैं ? 3
अ) "इसके पाँच रुपये लगेंगे।"
ब) "आशा मैं तुम्हारे लिए ऐसी ही चादर ला दूँगी।"
क) "मेरे घर में दादा-दादी, माँ-पिता जी और छोटी बहन हैं।"
- प्र. 4. नीचे दिए गए कविता की पंक्तियाँ पूर्ण कीजिए । 2
अ) दर्जी ने वह पैट बनाई, जिसकी
मोनू ने जब पैट चढाई, कमर में
- प्र. 5. नीचे दिए गए प्रश्नों के उत्तर एक पूर्ण वाक्य में लिखिए । 5
6. पूर्णिमा कहाँ टहल रही थी ?
7. कौआ कैसा था ?
8. हर्षल कहाँ रहता था ?
9. मोनू बार-बार पैट किससे कसता है ?
10. सभी ने मिलकर क्या तय किया ?
- प्र. 6. नीचे दिए गए प्रश्नों के उत्तर दो-तीन पंक्तियों में लिखिए । 4
3. आशा क्यों रूआँसी हो गई ?
4. चादर पर कौन- कौन से चित्र थे ?
- प्र. 7. अ) नीचे दिए गए शब्दों के समानार्थी शब्द लिखिए । (कोई दो) 2
1) मौसम 2) जग 3) समाप्त
- प्र. 7. ब) नीचे दिए गए शब्दों के विरुद्धार्थी शब्द लिखिए । (कोई दो) 2
1) रोना 2) पतला 3) सुंदर
- प्र. 7. क) लिंग परिवर्तन कीजिए । 2
1) पत्र 2) बकरा
- प्र. 7. ड) वचन बदलो । 2
1) वह 2) मछली
- प्र. 7. इ) नीचे दिए गए वाक्यों में संज्ञाओं को रेखांकित कीजिए । 3
1) भारत की राजधानी दिल्ली है।
2) गंगा नदी बहुत बड़ी है।
3) मेरे पिताजी एक चिकित्सक है।

प्र. 1ला. रिकाम्या जागी योग्य शब्द भरा. (Fill in the blanks)

2

- 1) तिंबून तिंबून _____ मळतो.
- 2) एक दिवस _____ जंगलाकडे निघाले.

प्र. 2रा. योग्य जोड्या जुळवा. (Match the column)

2

- | 'अ' गट | 'ब' गट |
|------------------|-------------|
| 1) गाणी गाणारा | 1) फेरीवाला |
| 2) आईला तपासणारे | 2) चिंगी |
| | 3) डॉक्टर |

प्र. 3रा. खालील प्रश्नांची एका शब्दात उत्तरे लिहा. (Answer in one word)

4

- 1) बाजारात जाताना कोणत्या पिशव्या बरोबर न्याव्यात ?
- 2) सर्वाना घरी कोण पोहोचवते ?
- 3) सानेगुरुजी कशातून प्रवास करीत होते ?
- 4) उस्मानच्या घरी कोणता सण होता ?

प्र. 4था. खालील प्रश्नांची उत्तरे एका वाक्यात लिहा. (Answer in one sentence)

5

- 1) प्रवाशांचे खाणे झाल्यावर गुरुजींनी काय केले ?
- 2) सुमा चंदनला काय म्हणाली ?
- 3) तुम्ही संगणकावर काय काय करता ?
- 4) बाबा आईला काय म्हणाले ?
- 5) आगगाडीला घरांची माळ का म्हटले आहे ?

प्र. 5वा) कोण कोणास म्हणाले ? (Who said to whom ?)

3

- 1) " आता मला बरं वाटतयं "
- 2) " अरेरे! शिकार हातची गेली. "
- 3) " नाही. आज रमजान ईद आहे. "

प्र. 6वा.अ) खालील मराठी शब्दांचे अर्थ इंग्रजीत लिहा. (कोणतेही दोन)

2

(Write the meanings of the following words in English) (any two)

- 1) फुलणे –
- 2) स्वयंपाक –
- 3) दगड –
- 4) चालक –

आ) खालील इंग्रजी शब्दांचा अर्थ मराठीत लिहा. (कोणतेही दोन)

2

(Write the meanings of the following words in Marathi) (any two)

- 1) shell –
- 2) wind –
- 3) garbage –
- 4) country –

प्र. 7वा. अ) खालील तक्ता पूर्ण करा (लिंग) (Complete the table) (Gender)

2

(फुल, मित्र, दुकान, सुरभी)

तो	ती	ते



आ) वचन बदला (Write singular or plural) (any two)

2

- 1) तवा –
- 2) चेहरा –
- 3) जग –
- 4) डबा –

इ) खालील चित्रांवरून सणांची नावे लिहा. (Observe the picture and write the name of the festival) (any two)

2



प्र. 8वा. खालील विषयावर निबंध लिहा. (Write an essay)

4

- 1) माझी आई

हार्दिक शुभेच्छा

Thakur Educational Trust's (Regd)
THAKUR VIDYA MANDIR HIGH SCHOOL & JUNIOR COLLEGE
II Terminal Re-examination 2016-17
Subject: EVS - II

Std: IV

Marks: 32

Date: 16.02.2017

Time : 30hrs.

QI A. Fill in the blanks :

(5)

- 1) The Bargirs and Shiledars were the two classes of troops in _____.
- 2) Jijabai was the daughter of _____ of Sindkhed.
- 3) _____ become the first capital of Swaraj.
- 4) Afzalkhan was previously the Subhedar _____.
- 5) Ghodkhind become immortal in history as _____.

B. Match the pairs :

(2)

A

B

- | | |
|---------------------|---|
| 1) Tanaji's brother | a) performed the coronation ceremony of Shivaji Maharaj |
| 2) Gagabhatt | b) Raiba |
| | c) Suryaji |

C. Name the following :

(4)

- 1) A capable vazir of Nizamshah.
- 2) Hoisted the Maratha flag at the main entrance.
- 3) The year in which Shivaji's coronation took place.
- 4) The person who shouted 'The devil, the devil'.

OII A. Who said to whom :

(2)

- 1) " Until now I have not seen a swordsman like you "
- 2) " As soon as we gain the fort, guns will be fired "

B. Complete the words from the given first letter :

(2)

- 1) Au _ _ _ _ _
- 2) Pu _ _ _ _ _

C. Arrange the following events in chronological order :

(2)

- 1) Shivaji and his men departed towards Sinhagad fort.
- 2) Shaistakhan made Lal Mahal his headquarters.
- 3) Shaistakhan captured the fort of Chakan.
- 4) Shivaji taught a lesson to Shaistakhan.

QIII A. Answer the following in one sentence each :

(5)

- 1) What were the two main divisions of Shivaji's army ?
- 2) How many persons would accompany Shivaji and Afzalkhan?
- 3) What did Jijamata say to Shivaji about Kondana?
- 4) How did Shahaji Raje justify Shivaji 's activities?
- 5) What challenge did Afzalkhan accept ?

B. Give reasons :

(4)

- 1) Shivaji decided to sign a treaty with Mirza Raje Jaising.
- 2) Tanaji postponed his son's wedding.

C. Answer in brief :

(6)

- 1) Why did Shivaji Maharaj get himself crowned ?
- 2) Write a short note on 'Baji Prabhu'.
- 3) Why did Shivaji leave the court of Aurangzeb angrily?

All the best